

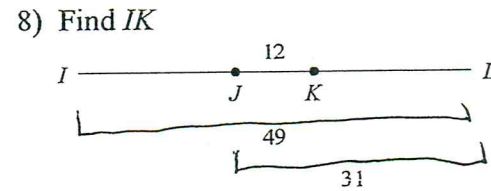
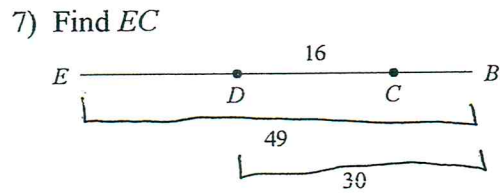
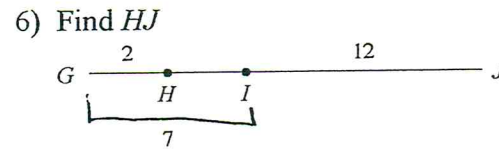
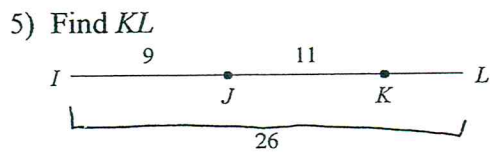
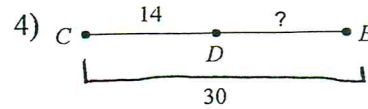
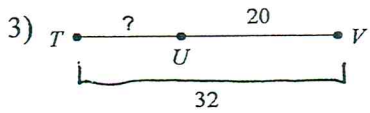
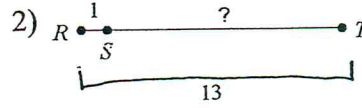

: Segment and Angle Bisectors.
 geometry
 J. Kelly

The Segment Addition Postulate

Name _____

Date _____ Period _____

Find the length indicated.



Points A, B, and C are collinear. Point B is between A and C. Find the length indicated.

9) Find AC if $AB = 16$ and $BC = 12$.

10) Find AC if $AB = 13$ and $BC = 9$.